



OVIDYA BHAWAN, BALIKA VIDYAPITH

Shakti Utthan Ashram, Lakhisarai-811311(Bihar)

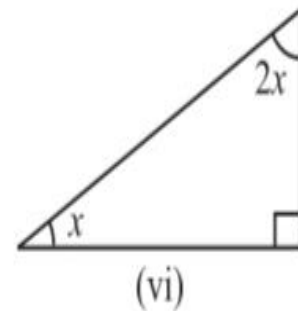
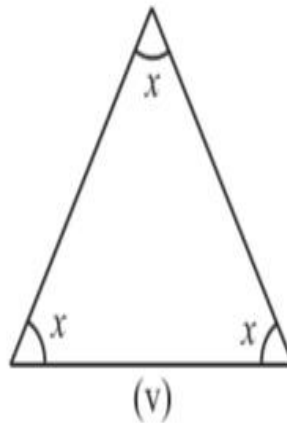
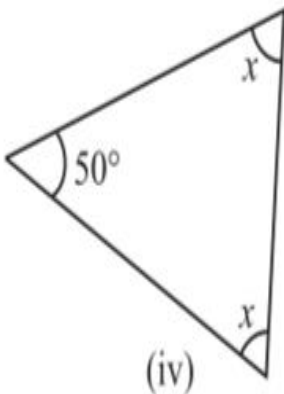
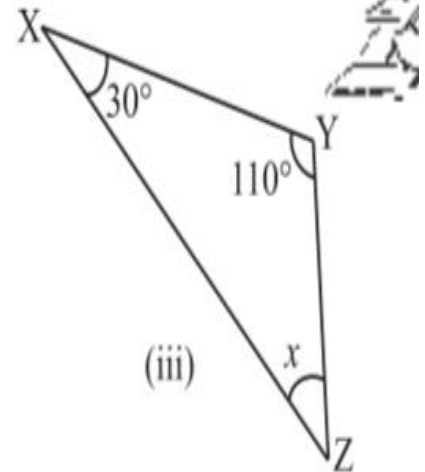
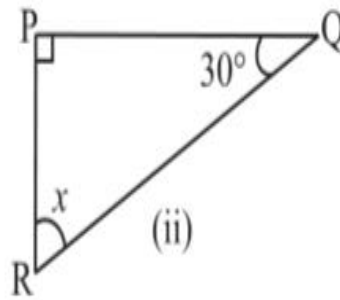
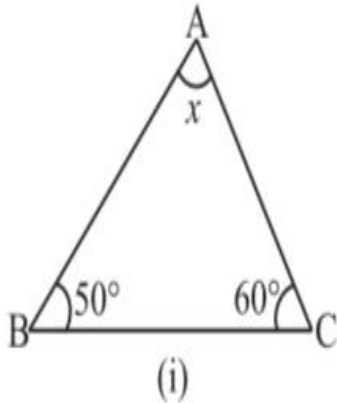
(Affiliated to CBSE up to +2 Level)

CLASS: VII

SUB.: MATHS (NCERT BASED)

DATE: 06-09-2020

1. Find the value of the unknown x in the following diagrams:



2. Find the values of the unknowns x and y in the following diagrams:

